


The Gingerbread Man

Write down the answers in the circles.



$$- 1 = \bigcirc$$



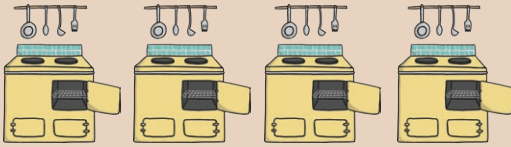
$$- 3 = \bigcirc$$




$$- 2 = \bigcirc$$



$$- 2 = \bigcirc$$



$$- 1 = \bigcirc$$




$$- 2 = \bigcirc$$



$$- 3 = \bigcirc$$



$$- 4 = \bigcirc$$



$$- 3 = \bigcirc$$